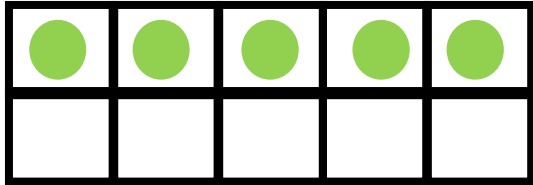
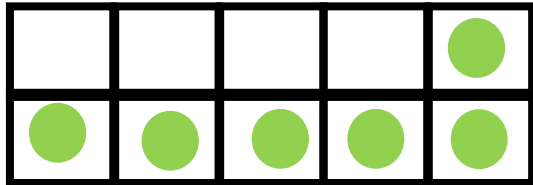


Name: _____

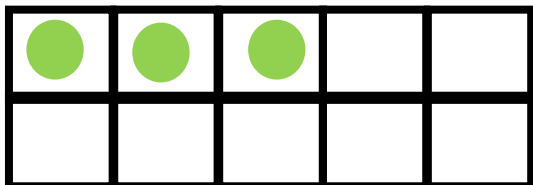
Ways To Make 10



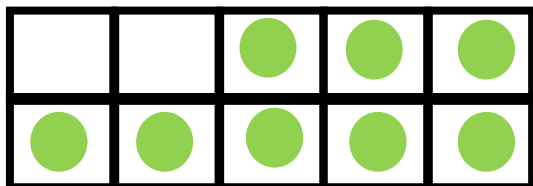
$$\square + \square = \boxed{10}$$



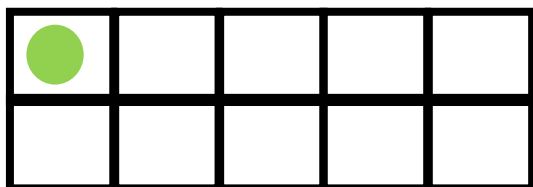
$$\square + \square = \boxed{10}$$



$$\square + \square = \boxed{10}$$



$$\square + \square = \boxed{10}$$



$$\square + \square = \boxed{10}$$