

Name _____

Fraction

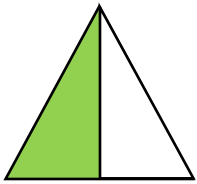
Fraction means some part of the whole thing. Numerically it's written as one number over another. The bottom number represents how many parts are made. It's called the **Denominator**. The top number represents the number of parts we are talking about. It's called the **Numerator**.

1 → Numerator

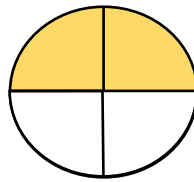
2 → Denominator



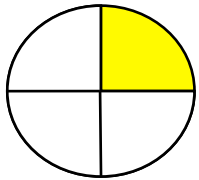
Write the correct fraction that shows the shaded part.




$\frac{\square}{2}$




$\frac{\square}{4}$



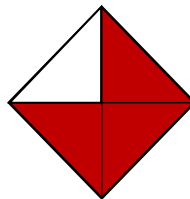
$\frac{\square}{4}$



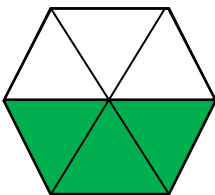
$\frac{\square}{4}$



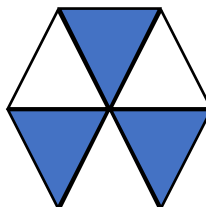
$\frac{\square}{3}$



$\frac{\square}{4}$



$\frac{\square}{6}$



$\frac{\square}{6}$