

Name _____

Geometry : Shapes


Count and Write the sides and vertices of each shape.



Square

_____ Sides

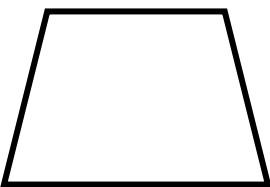
_____ Vertices



Diamond

_____ Sides

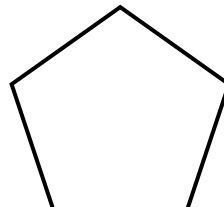
_____ Vertices



Trapezoid

_____ Sides


_____ Vertices



Pentagon

_____ Sides


_____ Vertices



Triangle

_____ Sides


_____ Vertices



Parallelogram

_____ Sides

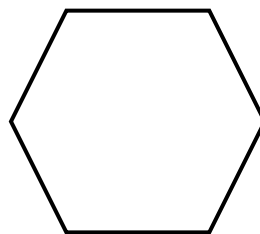
_____ Vertices



Circle

_____ Sides

_____ Vertices



Hexagon

_____ Sides

_____ Vertices