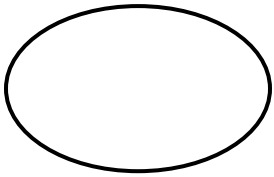


Name _____

Geometry : Shapes


Count and Write the sides and vertices of each shape.



Oval

Sides


Vertices



Diamond

Sides


Vertices



Star

Sides

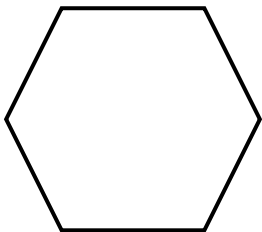
Vertices



Circle

Sides


Vertices



Hexagon

Sides

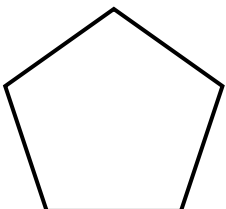
Vertices



Parallelogram

Sides

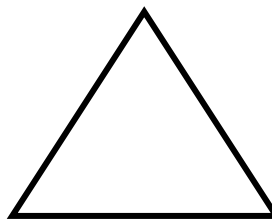
Vertices



Pentagon

Sides

Vertices



Triangle

Sides

Vertices