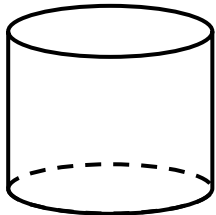


Name _____

Geometry : 3D Shapes


Count and Write the sides and vertices of each shape.



Cylinder

_____ Sides

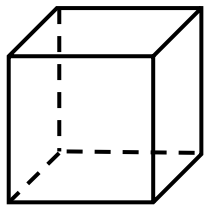
_____ Vertices



Circle

_____ Sides


_____ Vertices



Cube

_____ Sides

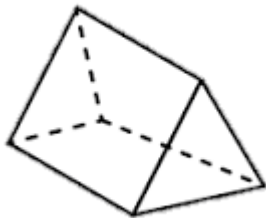
_____ Vertices



Square

_____ Sides


_____ Vertices



Triangular
prism

_____ Sides

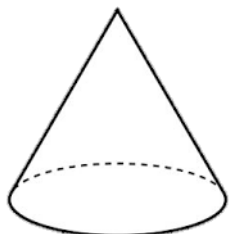
_____ Vertices



Parallelogram

_____ Sides

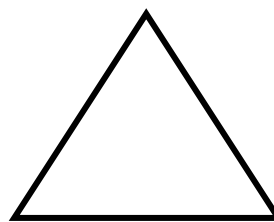
_____ Vertices



Cone

_____ Sides

_____ Vertices



Triangle

_____ Sides

_____ Vertices