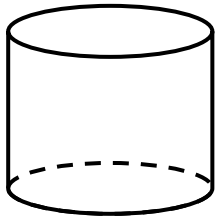


Name _____

Geometry : 3D Shapes

Count and Write the sides and vertices of each shape.

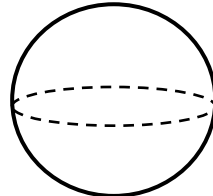


Cylinder

Sides

Faces

Vertices

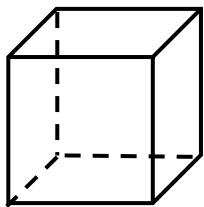


Sphere

Sides

Faces

Vertices

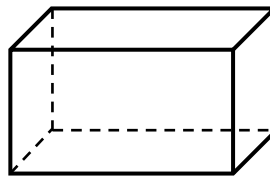


Cube

Sides

Faces

Vertices

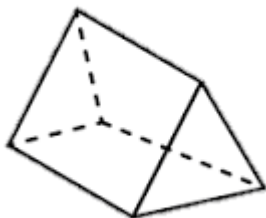


Cuboid

Sides

Faces

Vertices

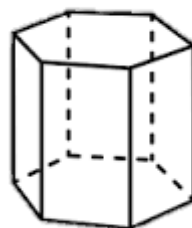


Triangular
prism

Sides

Faces

Vertices

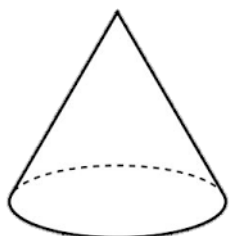


Hexagonal
Prism

Sides

Faces

Vertices

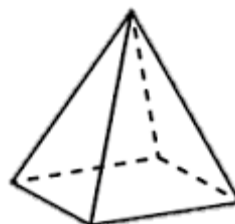


Cone

Sides

Faces

Vertices



Square
Pyramid

Sides

Faces

Vertices