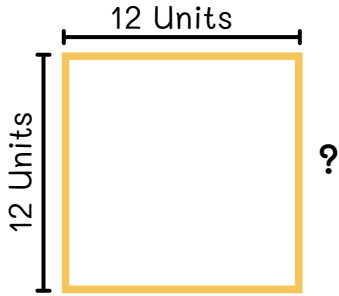


Name: \_\_\_\_\_

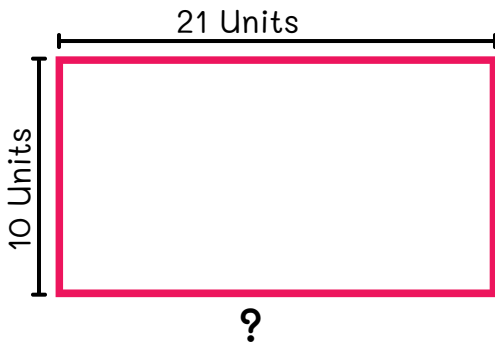
Find the missing sides in units of the shapes below.



Answer:

Properties of **square**:

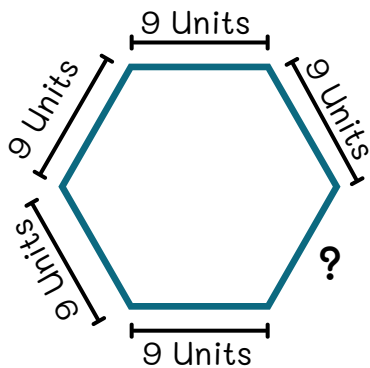
1. Has four sides and four angles.
2. All four sides are of same length.
3. Opposite sides are parallel



Answer:

Properties of **rectangle**:

1. Has four sides and four angles.
2. Opposite sides are parallel and of same length.



Answer:

Properties of **hexagon**:

1. Has six sides.
2. All sides are of same length.
3. Has six angles.