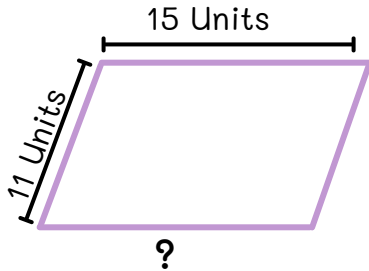


Name: \_\_\_\_\_

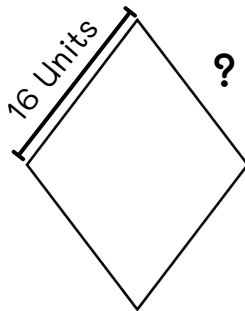
Find the missing sides in units of the shapes below.



Answer:

Properties of **Parallelogram**:

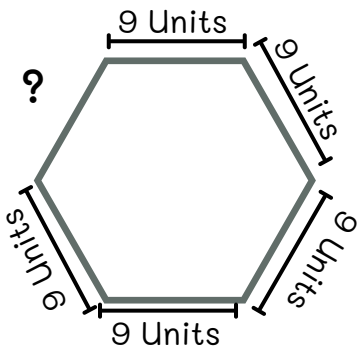
1. Has four sides and four angles.
2. It is a quadrilateral
3. Opposite sides are congruent ( identical)



Answer:

Properties of **rhombus**:

1. Has four equal sides.
2. Opposite sides are parallel.
3. Has two diagonals connecting pairs of opposite vertices, and two pairs of parallel sides.



Answer:

Properties of **hexagon**:

1. Has six sides.
2. All sides are of same length.
3. Has six angles.