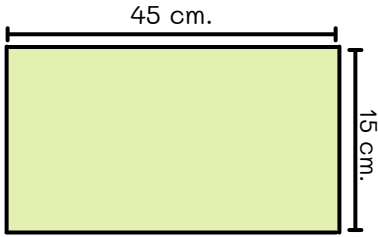


Name: _____

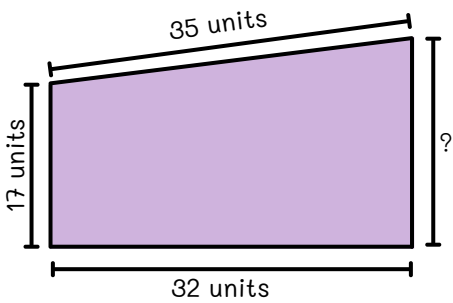
Find the area/perimeter of the figure.

What is the **area** of the rectangle?



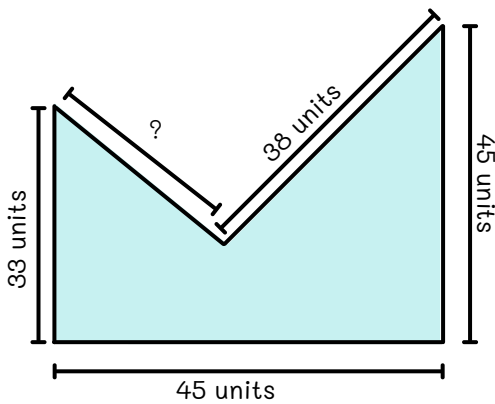
Answer:

If the perimeter of the figure is 106 units. Find the missing length of the figure.



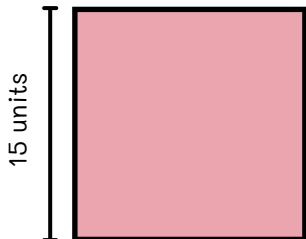
Answer:

If the perimeter of the figure is 189 units. Find the missing length of the figure.



Answer:

What is the **area** of the square?



Answer: