

Name: _____

Help the Elf Make 10


Santa asked his elves to practice their math. Help this elf make ten! Follow the example provided and see how many ways you can make 10.



$$\textcircled{4} + \textcircled{6} = 10$$




$$\textcircled{} + \textcircled{} = 10$$




$$\textcircled{} + \textcircled{} = 10$$



$$\textcircled{} + \textcircled{} = 10$$




$$\textcircled{} + \textcircled{} = 10$$




$$\textcircled{} + \textcircled{} = 10$$



$$\textcircled{} + \textcircled{} = 10$$



$$\textcircled{} + \textcircled{} = 10$$



$$\textcircled{} + \textcircled{} = 10$$